

EYFS Home Learning Pack



Name: _____

The Federation of

 Orchard
Primary School




Southwold
Primary School



Hoxton Garden
Primary School

Literacy



Read the book 'Super Daisy and the Peril of Planet Pea' with an adult. Remember to sound out and blend unfamiliar words. How many tricky words can you spot?



"We won't die, will we?" asked Gabby.



"No," said Daisy, "it's **MUCH** more serious than that! means we will get peas with everything."


"EVERYTHING!!!!!!!" gasped Gabby and Dylan.

EVERYTHING!!!!

frowned Daisy.



"What are we going to do?" asked Dylan and Gabby.



"This is a job for Super Daisy!" said Daisy.



Super Daisy is faster than an astro rocket!



Super Daisy is stronger than a lunar elephant!



Super Daisy is fiercer than a cosmic tiger!



Super Daisy is smarter than a space alien from Planet Brainbox!







"THANKS TO SUPER DAISY,
THERE WILL BE NO MORE
PEAS EVER AGAIN
ANYWHERE EVER
IN THE WORLD!!!!"




"Dinner's ready, Super Daisy!" called Daisy's mum from the kitchen.

"Super sauce or normal sauce?" asked Mum.

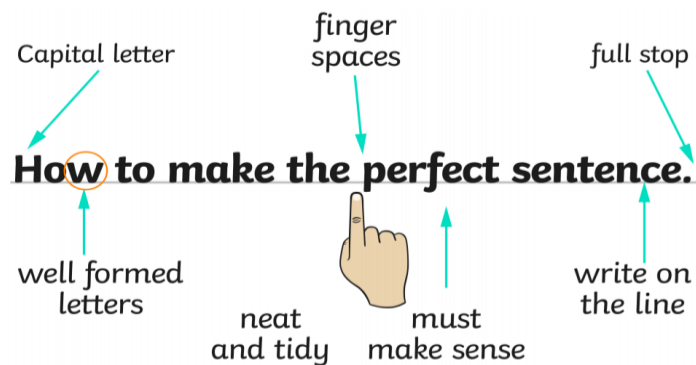
"I think you missed some," whispered Dylan,
looking down at his plate.

"I think you missed some too," whispered Gabby.

"Normal sauce,"
groaned Daisy.

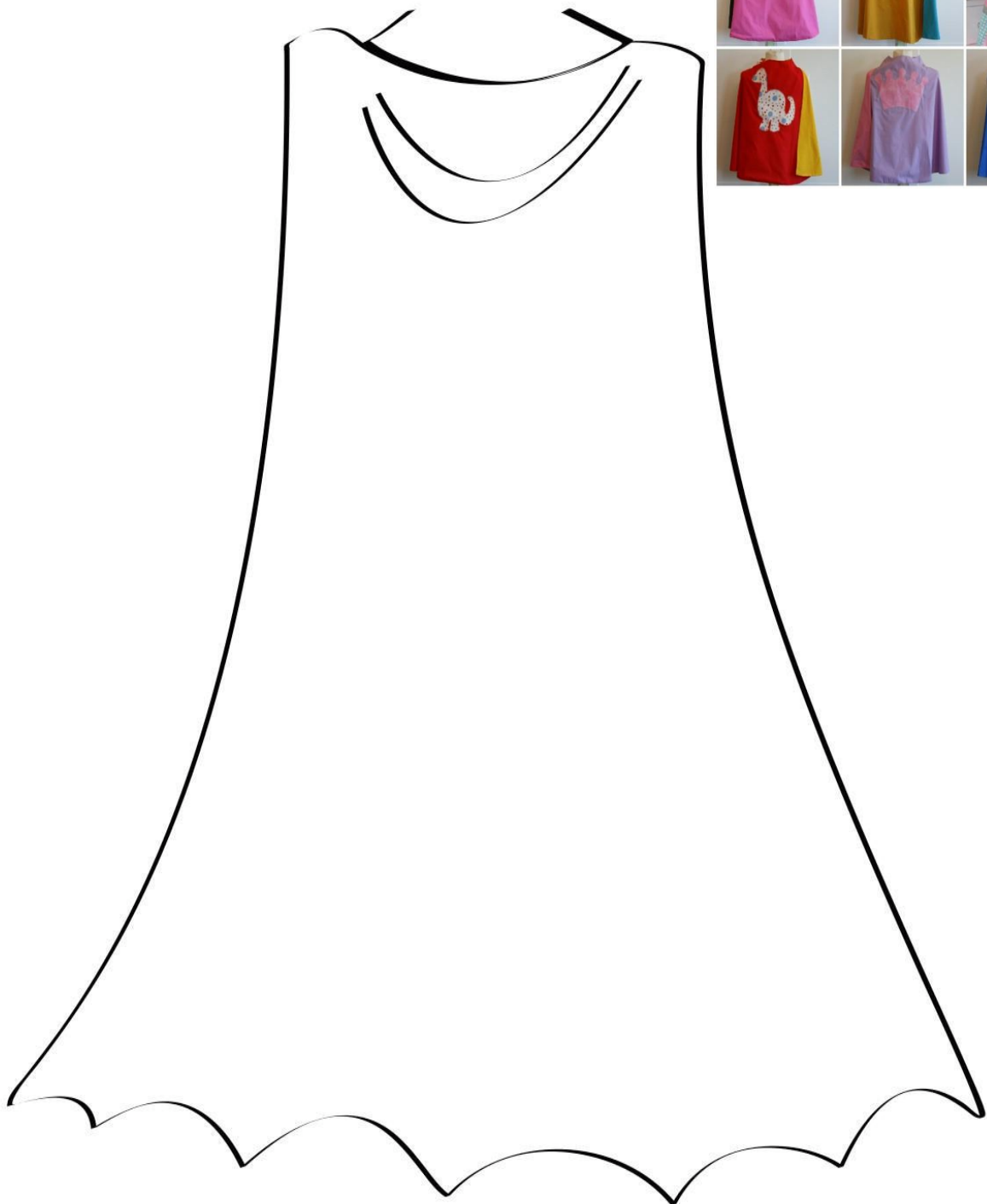


Can you write about your favourite part
of the story?



Can you design a superhero cape?

What will you add onto your cape?



Use your phonics to sound out and
blend the words below. Draw a line to the
matching picture when you have read
each word

moon

card

cork

book

wood

fork

jar

boot




Can you add the amounts together to
find the total?



+




=



+




=



+




=



+




=



+



=



Can you add the amounts together to
find the total?

$$3 + \text{BOOM! BOOM!} = \bigcirc$$

$$2 + \text{[4 superhero girls]} = \bigcirc$$

$$0 + \text{[3 superhero girls in wheelchairs]} = \bigcirc$$


$$5 + \text{[5 superhero boys]} = \bigcirc$$

$$6 + \text{[3 superhero girls]} = \bigcirc$$

Can you double the amounts on each
ladybird?



Double 5 is _____




Double 6 is _____



Double 7 is _____



Double 8 is _____




Double 9 is _____




Double 10 is _____


Can you halve the amounts on each
ladybird?




Half of 2 is _____



Half of 4 is _____



Half of 6 is _____



Half of 8 is _____



Half of 10 is _____

Can you fill in the missing numbers?

$$5 + \text{ } = 10$$

$$10 = 2 + \text{ }$$

$$\text{ } + 3 = 10$$

$$10 = \text{ } + 8$$

$$7 + \text{ } = 10$$

$$\text{ } + 4 = 10$$

$$10 + \text{ } = 10$$

